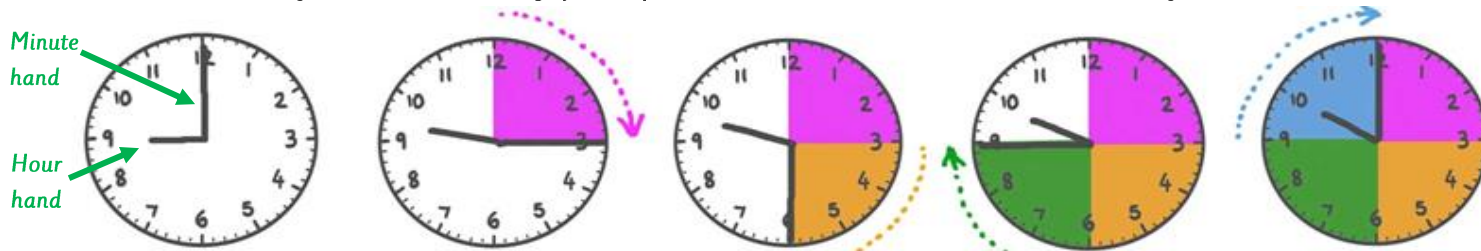


What should I already know?

- Be able to tell the time to the hour and half past the hour and draw the hands on a clock face to show these times.
- Recognise and use language relating to dates, including days of the week, weeks, months and years.

Key Knowledge

Tell and write the time to five minutes, including quarter past/to the hour and draw the hands on a clockface to show these times.



O'clock
On the hour
9 o'clock


Quarter past
15 minutes has passed
Quarter past 9

Half past
30 minutes has passed
Half past 9

Quarter to
45 minutes has passed
Quarter to 10

O' clock
60 minutes has passed
10 o'clock

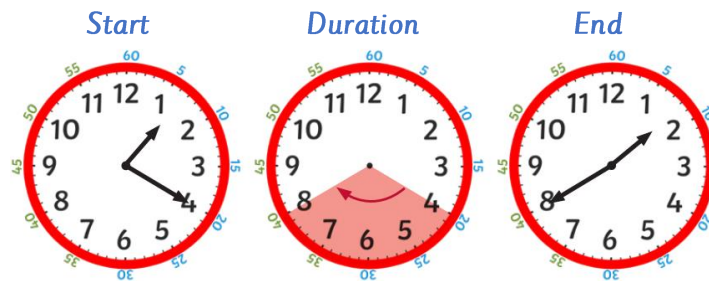
Telling the time to 5 minutes



10 minutes past 10

20 minutes to 8

Find durations of time



Start

Duration

End

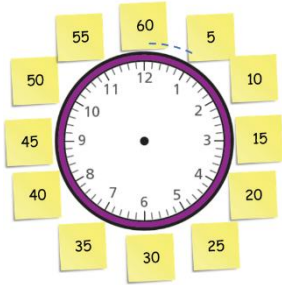
20 minutes has passed

Key Vocabulary and definitions

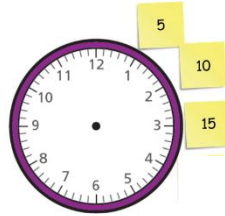
Hour	There are 60 minutes in an hour.
Minute	There are 60 seconds in a minute.
Clock Hands	The hands (pointers) showing the time on a clock face (analogue clock).
O'clock	The term used to specify the hour when telling the time e.g., 9 o'clock.
Half past	thirty minutes past the hour e.g., half past 9.
Quarter past	15 minutes past the hour e.g., quarter past 9.
Quarter to	45 minutes past the hour, towards the next hour e.g., quarter to 10.
Duration	The time during which something continues.
Shorter	lasting or taking a smaller amount of time.
Longer	lasting or taking a greater amount of time.

Know the number of minutes in an hour and the number of hours in a day.

There are **60 minutes** in an hour.

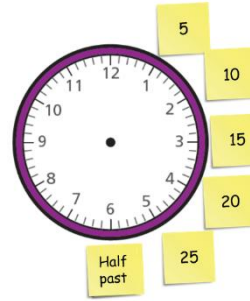


There are **15 minutes** in a quarter of an hour.

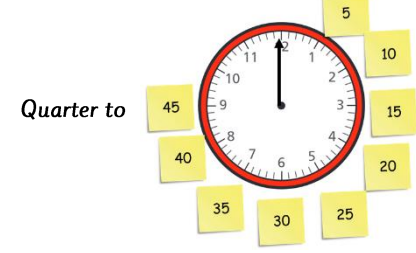


Quarter past

There are **30 minutes** in half an hour.



There are **45 minutes** in three quarters of an hour.



Quarter to

There are **24 hours** in a day.



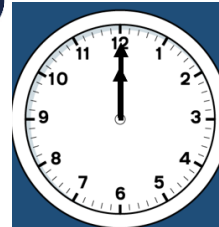
Morning



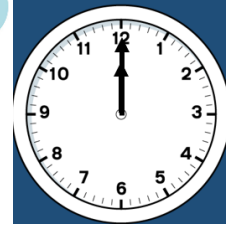
Afternoon



Evening



12 o'clock at night is called **midnight**.



12 o'clock in the middle of the day is called **noon**.

A new day begins at **midnight**.

Stem sentences:

When the minute hand points at 12/6, it means that the time is _____ (o'clock/half past).

The time is _____ o'clock/half past/quarter past/quarter to.

At quarter past/to _____, the minute hand is pointing to _____ and the hour hand is between the _____ and the _____.

When the minute hand is pointing to _____, the time is _____ minutes past/to the hour.

There are _____ minutes in 1 hour/quarter/half/three-quarters of an hour.

There are _____ hours in a day.